

Elves Number Patterns A

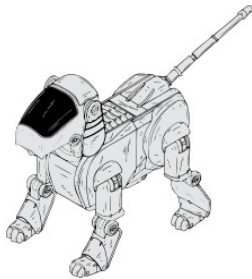


Instructions: Elves generally make the same toy the same number of times in a day. They keep a running total of the number of toys they've made. Continue the pattern to show the next three days totals.



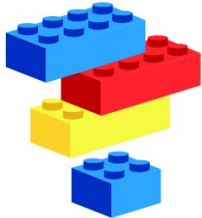
8, 12, 16, 20, _____, _____, _____.

Number of toys per day: _____



57, 65, 73, 81, _____, _____, _____.

Number of toys per day: _____



24, 29, 34, 39, _____, _____, _____.

Number of toys per day: _____



7, 9, 11, 13, _____, _____, _____.

Number of toys per day: _____



55, 57, 59, 61, _____, _____, _____.

Number of toys per day: _____



9, 17, 25, 33, _____, _____, _____.

Number of toys per day: _____



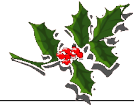
25, 33, 41, 49, _____, _____, _____.

Number of toys per day: _____





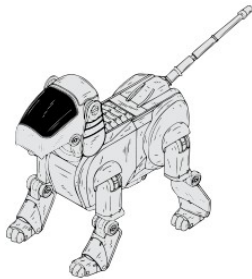
Elves Number Patterns A Answers



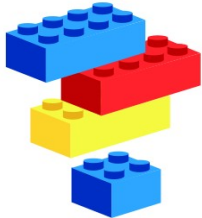
Instructions: Elves generally make the same toy the same number of times in a day. They keep a running total of the number of toys they've made. Continue the pattern to show the next three days totals.



8, 12, 16, 20, _____, _____, _____.
Number of toys per day: 4



57, 65, 73, 81, _____, _____, _____.
Number of toys per day: 8



24, 29, 34, 39, _____, _____, _____.
Number of toys per day: 5



7, 9, 11, 13, _____, _____, _____.
Number of toys per day: 2



55, 57, 59, 61, _____, _____, _____.
Number of toys per day: 2



9, 17, 25, 33, _____, _____, _____.
Number of toys per day: 8



25, 33, 41, 49, _____, _____, _____.
Number of toys per day: 8

